


If we know a perfect square, it is easy to find the next-largest perfect square by adding!




EXAMPLE | What is 11×11 ?

We already know $10 \times 10 = 100$.



To get from a 10×10 square to an 11×11 square, we just add 10 squares on the side and 11 squares on the top:

$$11 \times 11 = (10 \times 10) + (10 + 11) = 100 + 21 = 121.$$




PERFECT SQUARES
Next-Largest Square

PRACTICE

34. Now that we know $11 \times 11 = 121$, what is 12×12 ?

34. _____



Use your answer above to find the squares below:

35. 13×13

35. _____

36. 14×14

36. _____

37. How much larger is 15 squared than 14 squared?

37. _____


PERFECT SQUARES
Next-Smallest Square

If we know a perfect square, it is also easy to find the next-smallest perfect square by subtracting!




EXAMPLE | What is 19×19 ?

We know that $20 \times 20 = 400$.



To get from a 20×20 square to a 19×19 square, we remove a row on top and a column on the side. To find 19×19 , we subtract 20 and 19 from 400.




Subtracting 20 and 19 is the same as subtracting 39:
 $19 \times 19 = (20 \times 20) - 20 - 19 = 400 - 39 = 361$.

PRACTICE

38. Now that we know $19 \times 19 = 361$, what is 18×18 ?

38. _____




39. What is $(18 \times 18) - (17 \times 17)$?

39. _____

40. What is $(93 \times 93) - (92 \times 92)$?

40. _____



PRACTICE Complete these sequences of perfect squares.

41. $200 \times 200 =$ _____
 $201 \times 201 =$ _____
 $202 \times 202 =$ _____

42. $35 \times 35 =$ _____
 $36 \times 36 =$ _____
 $37 \times 37 =$ _____

43. $50 \times 50 =$ _____
 $49 \times 49 =$ _____
 $48 \times 48 =$ _____

44. $25 \times 25 =$ _____
 $24 \times 24 =$ _____
 $23 \times 23 =$ _____

45. ★ $29 \times 29 =$ _____
 $30 \times 30 =$ _____
 $31 \times 31 =$ _____

46. ★ $39 \times 39 =$ _____
 $40 \times 40 =$ _____
 $41 \times 41 =$ _____